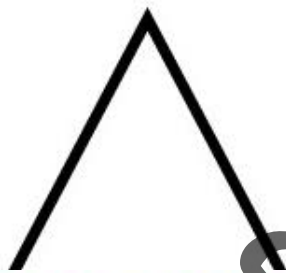


TWO DIMENSIONAL FIGURES

Math Task Cards

two dimensional figures

Is this a right triangle?



two dimensional figures

Draw and label this triangle:

Equilateral
Triangle

© The Teacher Next Door

two dimensional figures

Regular Polygons	Number of Sides	Number of Parallel Sides
Pentagon		
Hexagon		

two dimensional figures


Write at least two names for
this shape.



© The Teacher Next Door

two dimensional figures

Is this a right triangle?



1

© The Teacher Next Door

two dimensional figures

Regular Polygons	Number of Sides	Number of Parallel Sides
Pentagon		
Hexagon		

2

© The Teacher Next Door

two dimensional figures

Draw and label this triangle:


Equilateral
Triangle

3

© The Teacher Next Door

two dimensional figures

Write at least two names for
this shape.

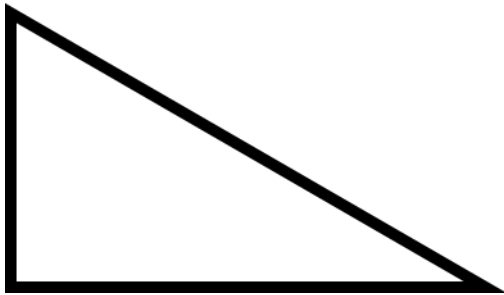


4

© The Teacher Next Door

two dimensional figures

Is this a right triangle?



5

© The Teacher Next Door

two dimensional figures

Regular Polygons	Number of Sides	Number of or Sets of Parallel Sides
Rectangle		
Trapezoid		

6

© The Teacher Next Door

two dimensional figures

Draw and label this triangle:

Scalene Triangle

7

© The Teacher Next Door

two dimensional figures

Write at least two names for this shape.



8

© The Teacher Next Door

two dimensional figures

Is this a right triangle?



9

© The Teacher Next Door

two dimensional figures

Regular Polygons	Number of Sides	Number of or Sets of Parallel Sides
Square		
Rhombus		

10

© The Teacher Next Door

two dimensional figures

Draw and label this triangle:

Isosceles Triangle

11

© The Teacher Next Door

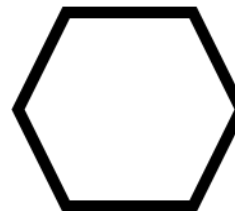
two dimensional figures

Match the shape:

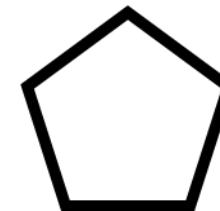
A. Trapezoid

B. Hexagon

C. Pentagon



1. _____



2. _____



3. _____

12

© The Teacher Next Door

1.	2. Pentagon: Hexagon:	3.	4.
5.	6. Rectangle: Trapezoid:	7.	8.
9.	10. Square: Rhombus:	11.	12. 1. 2. 3.
13.	14. Square: Rhombus:	15.	16.
17.	18. Rectangle: Trapezoid:	19.	20.
21.	22. Pentagon: Hexagon:	23.	24.

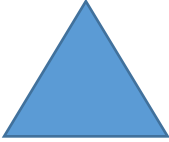


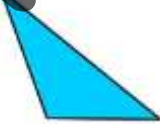


25.	26. A = _____ B = _____	27. A. _____ B. _____ C. _____	28.
29.	30.	31. A. _____ B. _____ C. _____	32. _____ _____ _____ _____

CCSS 4.G.2 Two Dimensional Figures

©The Teacher Next Door

PREVIEW

Answer Key

1. no	2. Pentagon: 5, 0 Hexagon: 6, 0	3. equilateral triangle 	4. Polygon, rhombus, quadrilateral...
5. yes	6. Rectangle: 4, 2 sets Trapezoid: 4, 2	7. scalene triangle 	8. square, rectangle, polygon, quadrilateral, parallelogram...
9. no	10. Square: 4, 2 sets Rhombus: 4, 2 sets	11. Isosceles Triangle 	12. 1. B 2. C 3. A
13. no	14. Square: 4 Rhombus: 0	15. Obtuse Triangle 	16. A
17. yes	18. Rectangle: 4 Trapezoid: 0	19. Acute Triangle 	20. C
21. yes	22. Pentagon: 0 Hexagon: 0	23. Right Triangle 	24. B

25. yes	26. A = Hexagon B = Pentagon	27. A. 2 B. 1 C. 3	28. C
29. no	30. Octagon	31. A. 2 B. 3 C. 1	32. 2D 3D B 3D

CCSS 4.G.2 Two Dimensional Figures

©The Teacher Next Door

PREVIEW