


Fractions: Wholes and Parts


Math Task Cards

fractions

Which of the fractions shows $\frac{4}{6}$?



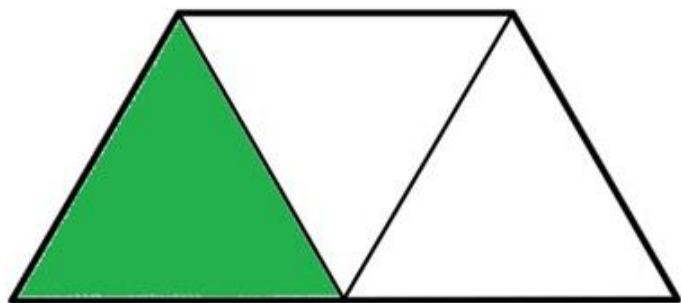
A.



B.

fractions

Name the fraction:



© The Teacher Next Door

fractions

Color $\frac{2}{5}$ of the arrows red

Color $\frac{3}{5}$ of the arrows blue



fractions

Draw a picture that shows:

$\frac{3}{4}$


© The Teacher

© The Teacher


The TEACHER next Door

fractions

Which of the fractions shows $\frac{4}{6}$?



A.



B.


1

© The Teacher Next Door

fractions

Color $\frac{2}{5}$ of the arrows red.

Color $\frac{3}{5}$ of the arrows blue.

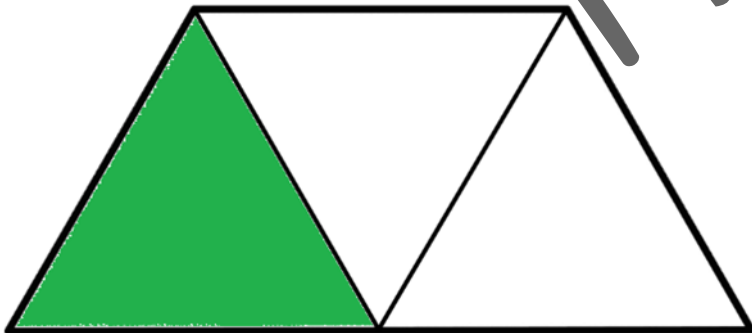


2

© The Teacher Next Door

fractions

Name the fraction:



3

© The Teacher Next Door

fractions

Draw a picture that shows:

$\frac{3}{4}$

4

© The Teacher Next Door

fractions

Which of the fractions shows $\frac{3}{4}$?



A.



B.

5

© The Teacher Next Door

fractions

Color $\frac{1}{3}$ of the triangles green.

Color $\frac{2}{3}$ of the triangles orange.

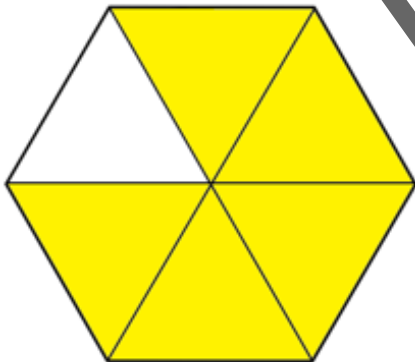


6

© The Teacher Next Door

fractions

Name the fraction:



7

© The Teacher Next Door

fractions

Draw a picture that shows:

$\frac{5}{7}$

8

© The Teacher Next Door

fractions

Which of the fractions shows $\frac{5}{8}$?



A.



B.

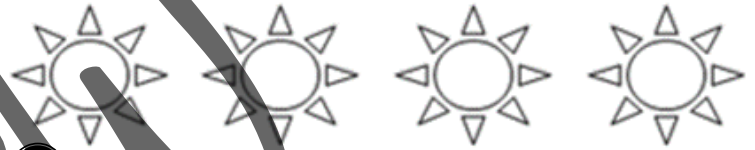
9

© The Teacher Next Door

fractions

Color $\frac{1}{4}$ of the suns yellow.

Color $\frac{3}{4}$ of the suns orange.

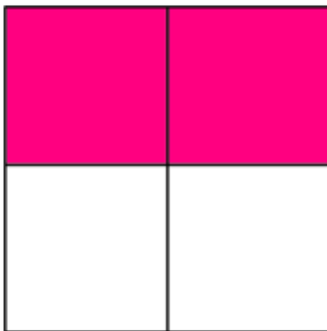


10

© The Teacher Next Door

fractions

Name the fraction:



11

© The Teacher Next Door

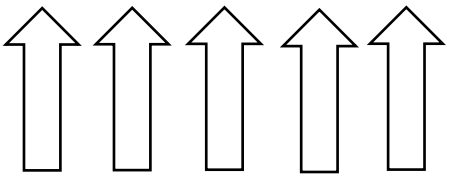
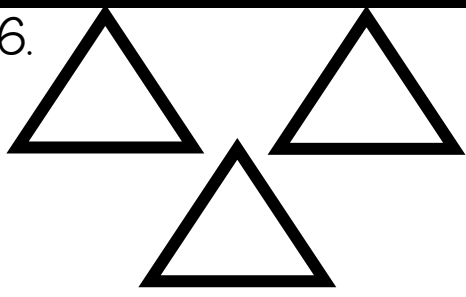




fractions

Draw a picture that shows:

$\frac{2}{6}$


12

© The Teacher Next Door

1.	2. 	3.	4.
5.	6. 	7.	8.
9.	10. 	11.	12.
13.	14. 	15.	16.
17.	18. 	19.	20.
21.	22. 	23.	24.

25.

26.




27.

28.

29.

30.



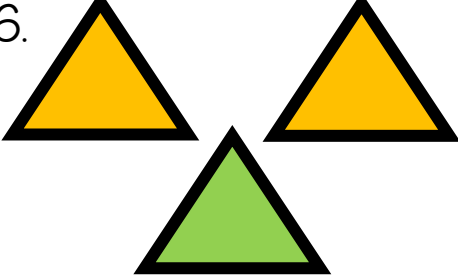




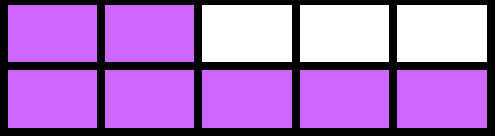






31.

32.

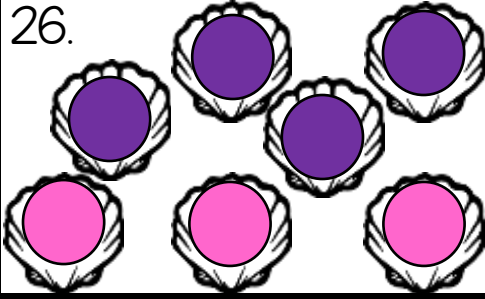
PREVIEW

Answer Key

1. A	2. 	3. $\frac{1}{3}$	4. 
5. B	6. 	7. $\frac{5}{6}$	8. 
9. B	10. 	11. $\frac{2}{4}$ or $\frac{1}{2}$	12. 
13. A	14. 	15. $\frac{1}{2}$	16. 
17. A	18. 	19. $\frac{4}{5}$	20. 
21. B	22. 	23. $\frac{6}{8}$	24. 

25. B

26.



27. $\frac{2}{8}$
or $\frac{1}{4}$

28.



29. A

30.



31. $\frac{9}{10}$

32.



PREVIEW