

FINDING area


Math Task Cards

finding area

What is the area?

7 ft.

3 ft.



finding area

Rover's doghouse floor was 4 feet by 5 feet. What was the total area?

finding area

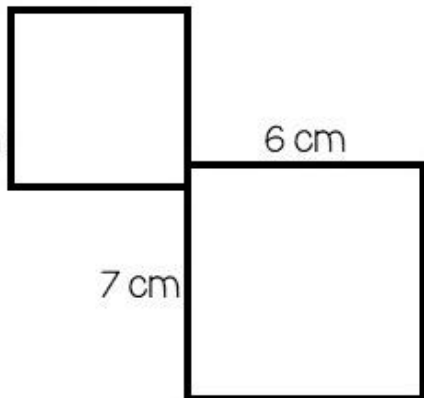
Find the total area of the shapes below.

4 cm

4 cm

6 cm

7 cm



© The Teacher Next Door

finding area

Find the area in square units by drawing it with square tiles.

6

3



4

© The Teacher Next Door


The TEACHER next Door

finding area

What is the area?

7 ft.

3 ft.



1

© The Teacher Next Door

finding area

Rover's doghouse floor
was 4 feet by 5 feet.
What was the total area?

2


© The Teacher Next Door

finding area

Find the total area of the shapes below.


4 cm

4 cm



6 cm

7 cm



3

© The Teacher Next Door

finding area

Find the area in square units by
drawing it with square tiles.

6

3

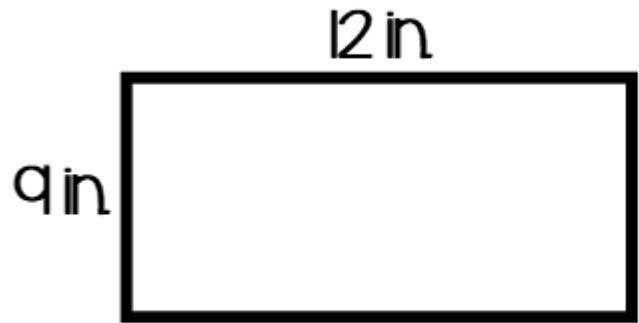


4

© The Teacher Next Door

finding area

What is the area?



5

© The Teacher Next Door

finding area

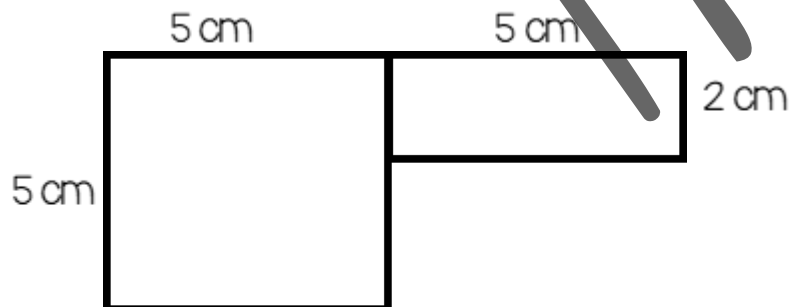
Mrs. Wilkerson had a vegetable garden. It measured 10 ft. by 11 ft. What was the total area?

6

© The Teacher Next Door

finding area

Find the total area of the shapes below.

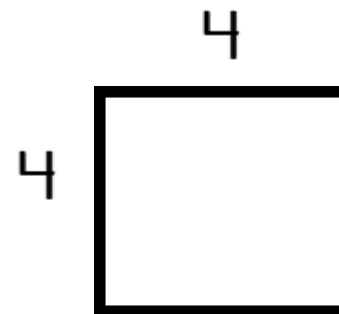


7

© The Teacher Next Door

finding area

Find the area in square units by drawing it with square tiles.

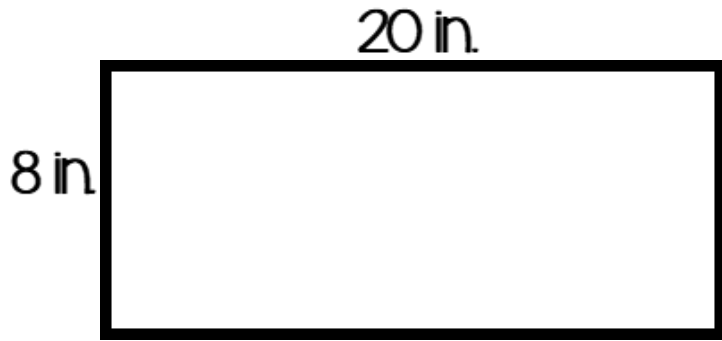


8

© The Teacher Next Door

finding area

What is the area?



9

© The Teacher Next Door

finding area

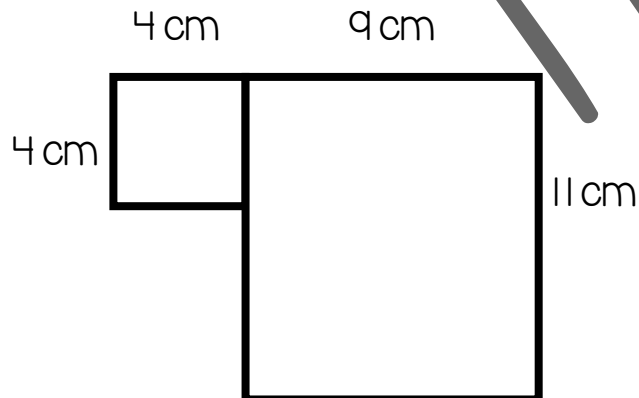
Olivia wanted to get new carpet for her room. Her room was 12 feet by 10 feet. What was the area of her bedroom?

10

© The Teacher Next Door

finding area

Find the total area of the shapes below.

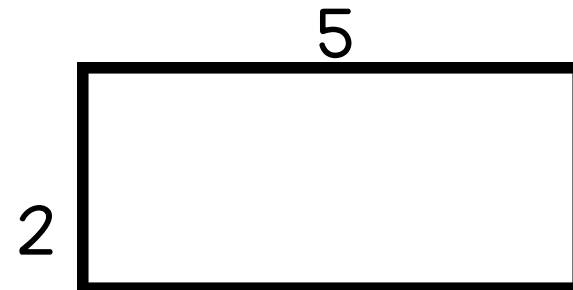


11

© The Teacher Next Door

finding area

Find the area in square units by drawing it with square tiles.



12

© The Teacher Next Door

1.	2.	3.	4.
5.	6.	7.	8.
9.	10.	11.	12.
13.	14.	15.	16.
17.	18.	19.	20.
21.	22.	23.	24.

PREVIEW







25.	26.	27.	28.
29.	30.	31.	32.

CCSS 3.MD.7A, 7B, 7C, 7D Finding Area

©The Teacher Next Door

PREVIEW

Answer Key


1. 21 sq. ft.	2. 20 sq. ft.	3. 58 sq. cm.	4. 18 sq. units 
5. 108 sq. in.	6. 110 sq. ft.	7. 35 sq. cm.	8. 16 sq. units 
9. 160 sq. in.	10. 120 sq. ft.	11. 115 sq. cm.	12. 10 sq. units 
13. 24 sq. in.	14. 56 sq. ft.	15. 66 sq. cm.	16. 12 sq. units. 
17. 300 sq. ft.	18. 40 sq. ft.	19. 84 sq. cm.	20. 22 sq. units 
21. 27 sq. in.	22. 100 sq. ft.	23. 90 sq. cm.	24. 15 sq. units 

25.
32 sq. ft.

26.
54 sq. ft.

27.
32 sq.
cm.

28. 33 sq. units




29.
30 sq.
yd.

30.
90 sq. ft.

31.
60 sq.
cm.

32. 20 sq. units



CCSS 3.MD.7.A, 7.B, 7.C, 7.D Finding Area

©The Teacher Next Door

PREVIEW